

Name of the candidate

Reg. No.

STD-4-25 F1

Maximum Marks: 100

Time: 90 Minutes

Question 1. Pick out the odd word from each group and write in the given box:

(2x1=2)

a) hockey, cricket, billiards, football

b) cub, chick, deer, lamb

Question 2. Write the antonyms for the following words:

(2x1=2)

a) heavy : b) open :

Question 3. Write the synonyms for the following words:

(2x1=2)

a) look : b) smell :

Question 4. Complete the following sentences by choosing the correct words from the brackets:

(2x1=2)

a) The medicine has no on him. (effect / affect)

b) He did not what his father said. (here / hear)

Question 5. Fill in the blanks by selecting the suitable prepositions from the box:

(2x1=2)

under, from, against, with

a) Do not complain him.

b) We sat the tree.

Question 6. Study the following bill and answer the questions:

(3x2=6)

Serial Number	Title of book	Quantity	Rate (in Rupees)	Amount (in Rupees)
1	Basic Reader	5	12	60
2	Atlas	1	60	60

a) What is the rate of Atlas ?

.....

b) What is the rate of Basic Reader ?

.....

c) Why is the number 60 written in both rate and amount columns against the book Atlas ?

.....

Question 7. Using the letters in the grid, make three words of four letters each:

(3x4=12)

L	B	P
S	A	E
I	R	T

- i)
- ii)
- iii)

Question 8. Rearrange the words to form meaningful sentences:

(2x4=8)

a) habit / is / hands / a / washing / eating / before / good

.....

b) spots / is / tourist / one / in / the / Chennai / of / India / South

.....

Question 9. Write the next two numbers in the following series:

(1x2=2)

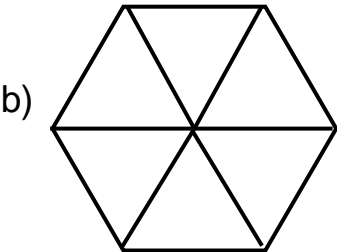
809, 839, 869, _____, _____

Question 10. Some shapes are given below. Shade the portion of the shapes so as to represent the given fractions:

(2x4=8)



Shade $\frac{4}{5}$



Shade $\frac{1}{6}$

Question 11. We should plant more trees. What are the three major benefits of planting more trees?

(1 x4=4)

.....

.....

.....

Question 12. Fill in the blanks:


(5x2=10)

- a) The largest organ in the human body is the
- b) The food we consume is absorbed through the walls of
- c) A tennis ball is an example of a shape.
- d) The length of the boundary of any figure is its
- e) The sum of $700 + 300$ is

Question 13. Identify the pictures and answer the following questions:


(4x2=8)

- a)




Write the name of the given object.

Answer :
- b)




Write the name of the place related to the given landmark in the picture.

Answer :
- c)



Write the name of the famous city where you can find this landmark.

Answer :
- d)



Write the name of the vehicle.

Answer :

Question 14. Answer the following questions:

(6x2=12)

- a) Day and Night on the Earth are caused by
.....
- b) The celestial bodies that revolve around a star are called
.....
- c) A State Flower of Kerala is
.....
- d) The state that is not located in the southern part of India is
.....
- e) Raja Ravi Varma distinguished himself in the field of
.....
- f) The part of our body that controls all our actions.
.....

